

Name _____




Counting and Writing Numbers

Count the objects in each set. Next write the number on the line below.




Now write the number below




Now write the number below



Now write the number below



Now write the number below



Now write the number below

Name _____

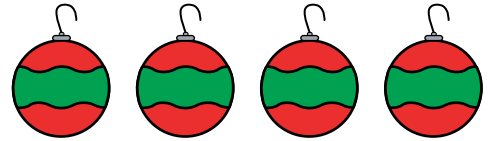


Counting and Writing Numbers

Count the objects in each set. Next write the number on the line below.



Now write the number below



Now write the number below



Now write the number below



Now write the number below



Now write the number below
